

Name.....

Index No

Candidate's Signature

Date:

121/2
MATHEMATICS
PAPER 2
JULY/AUGUST 2014
TIME: 2½ HOURS

HOMA-BAY SUB-COUNTY JOINT EVALUATION EXAM

Kenya Certificate of Secondary Education (K.C.S.E)

121/2
Mathematics
Paper 2
2 ½ hours

INSTRUCTIONS TO THE CANDIDATES

- Write **your name** and **index number** in the spaces provided above
- This paper contains two sections; **Section 1** and **Section 11**.
- Answer all the questions in **section 1** and only **five** questions from **Section 11**
- All workings and answers must be written on the question paper in the spaces provided below each question.
- Marks may be given for correct working **even if** the answer is wrong.
- Non programmable silent electronic calculators and KNEC Mathematical tables may be used **EXCEPT** where stated otherwise
- Show all the steps in your calculations, giving your answers at each stage in the spaces below each question.

FOR EXAMINERS'S USE ONLY

Section 1

Question	1	2	3	4	5	6	7	8	9	10	11	12	13	14	15	16	Total
Marks																	

Section 11

Question	17	18	19	20	21	22	23	24	Total
Marks									

GRAND TOTAL

--

This paper consists of 15 printed pages. Candidates should check carefully to ascertain that all the pages are printed as indicated and no questions are missing.

SECTION I(50 MARKS).

Answer All Questions from this section in the spaces provided

1. Evaluate using logarithms

(4mks)

$$\sqrt[5]{\frac{41.9x \log 1.159}{2.3 \times 10^3}}$$

2. A business lady bought 180 mangoes at Shs.60 for every five mangoes. She sold some of them at Shs.30 for every three and $33 \frac{1}{3} \%$ the rest at Sh.30 for every four. If she made a $33 \frac{1}{3} \%$ loss, calculate the number of mangoes sold at Shs.30 for every four (3mks)

3. Write an equation of a circle that has a diameter whose end points are at (2,7) and (-6, 15) in the form $x^2+y^2+ax+by+c=0$ where a,b and c are integers (3mks)

4. Miss Jaber bought a motor cycle at Shs.160,000. The depreciation rate was 6% per annum determined semi annually. How long will it take the motor cycle to be valued at a quarter of its original cost (3mks)

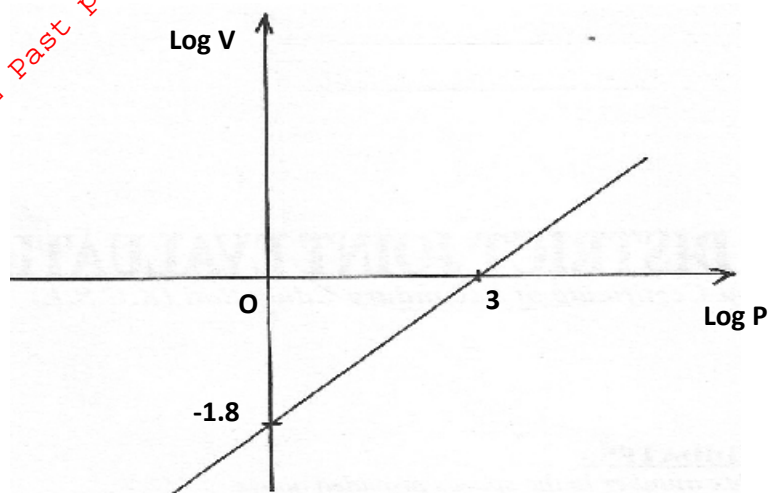
5. Given that $d = \sqrt[3]{\left(\frac{y-1}{y+1}\right)}$ express y in terms of d (3mks)

6. An arithmetic progression of 41 terms in such that the sum of the first five terms is 560 and sum of the last five terms is -250. Find the first term (3mks)

7. (a) Expand and simplify the binomial expression $(2x-y)^5$ (1mk)

(b) Use the first four terms of the expansion above to approximate the value of $(3.8)^5$ (2mks)

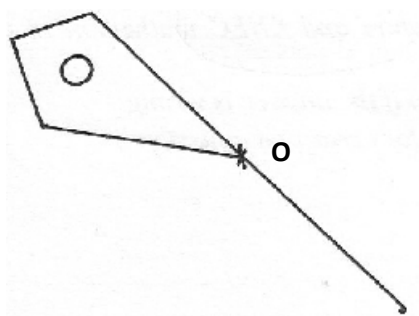
8. The graph below is part of the straight line graph obtained from the initial equation $V=ap^n$



(a) Write down the equation of the straight line in the form $y=mx+c$ (1mk)

(b) Use the graph to calculate the values of a and n (2mks)

9. In the figure below kite ABCD represents a part of a county government logo. The logo has symmetry order 4 about O. Complete the figure to show the logo (2mks)



10. The velocity V of a body moving in a straight line at any time t is given by $V=3t-2$. Its distance S at time $t=0$ is equal to $4m$. Calculate the distance when $t=4$ seconds (3mks)

11. The sides of a triangle were measured and recorded as $4cm$, $6.2cm$ and $9.50cm$. Calculate the percentage error in its perimeter, correct to 2 decimal places (3mks)

12. The size of an interior angle of a regular polygon is x^2 while its exterior angle is $3x$. Find the number of sides of the polygon (4mks)

13. Without using logarithms table, solve the equation (3mks)

$$\log(5x - 4) = \log(x - 2) + \frac{1}{3}\log 27$$

14. A rectangle ABCD is such that AB=6cm, and BC=5cm. A variable point P moves inside the rectangle such that AP = PB and AP > 2.5cm. Show the region where P lies (3mks)

15. Without using a calculator or mathematical table, express $\frac{\sin 60^\circ}{1 - \cos 30^\circ}$ (3mks)

In surd form and simplify

16. An angles of 0.9 radians at the centre of the circle subtends an arc of length 28.8cm. Find

(a) The radius of the circle (2mks)

(b) The area of the sector enclosed by the arc and radii (2mks)

SECTION B (50 MARKS)

Answer any five questions from the section in the spaces provided .

17. Mr. Alvin George, a civil servant gets a monthly salary of Shs. 48,000. He lives in a government house where he pays nominal rent of Shs.2500. Besides this he gets an automatic house allowance of Shs.12000 and medical allowance of shs.8000 per month. He gets a family relief of sh.1065 per month. The rates of income tax are shown below

Income tax in K£ per month	rates in shs. Per K£
1-400	10%
401-1200	15%
1201-2400	25%
2401-3600	35%
3601 and above	45%

Calculate:


- (a) His taxable income per month in Kenya pounds (2mks)

- (b) Net tax per month in Kshs. (6mks)

- (c) Net salary (2mks)

18. The vertices of a rectangle are A(-1,-1) B(-4,-1) C(-4,-3) and D(-1,-3)

(a) On the grid provided, draw the rectangle and its image $A_1B_1C_1D_1$ under a transformation whose matrix is $\begin{pmatrix} -2 & 0 \\ 0 & -2 \end{pmatrix}$ (4mks)



(b) A_2, B_2, C_2, D_2 is the image of A_1, B_1, C_1, D_1 under a transformation matrix $P = \begin{pmatrix} \frac{1}{2} & 1 \\ 1 & \frac{1}{2} \end{pmatrix}$

(i) Determine the co-ordinates of $A_2B_2C_2D_2$ (2mks)

(ii) On the same grid draw the quadrilateral $A_2B_2C_2D_2$ (1mk)

(c) Find the area of $A_2B_2C_2D_2$ (3mks)

19. A solution whose volume is 120 litres is made up of 35% water and the rest alcohol. When y litres of alcohol is added the percentage of water drops to 15%

(a) Find the value of y

(4mks)

(b) The new solution is diluted further by addition of seventy litres of water. Calculate the percentage of alcohol in the resulting solution

(2mks)

(c) A blend is made by mixing 10 litres of the solution in (b) above with 20 liters of the original solution. Calculate in the simplest form, the ratio of water to that of alcohol in the blend

(4mks)

20. A passenger plane takes off from airport A ($60^{\circ}\text{N}, 5^{\circ}\text{E}$) and flies directly to another airport B ($60^{\circ}\text{N}, 17^{\circ}\text{E}$) and then flies due North for 600 nautical miles (nm) to another airport C

(a) Find the position of airport C (3mks)

(b) Find the distance between airport A and B in nautical miles (3mks)

(c) If the plane at an average speed of 300 knots, find total flight time (2mks)

(d) Given that the plane left airport A at 9.20am. Find the local time of arrival at airport C (2mks)

21. In a certain country, the probability of a school A topping in county exams is $\frac{1}{3}$. If it tops the probability of it topping in KCSE is $\frac{5}{7}$ otherwise the probability of it topping in KCSE is $\frac{2}{9}$. If the school tops in KCSE the probability of its appearing in the newspaper is $\frac{2}{5}$, otherwise the probability of its appearing in newspaper is $\frac{4}{11}$

(a) Draw a tree diagram to represent the above information (2mks)

(b) Use the tree diagram to find the probability that:

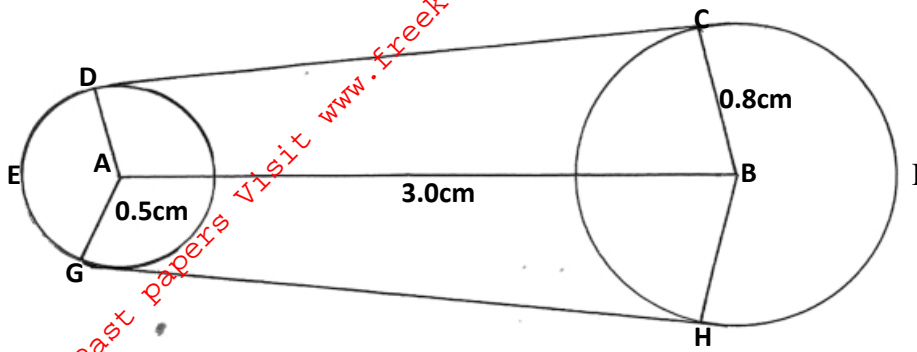
(i) The school tops in the two exams and appears in the newspaper (2mks)

(ii) The school did not appear in the newspaper (2mks)

(iii) The school topped in atleast one exam and did not appear in the newspaper (2mks)

(iv) The school appeared in the newspaper (2mks)

22. The diagram below shows a design model of a race course drawn to scale of 1:5000,000. It consists of two circles centre A and B radii 0.5cm and 0.8cm respectively and the distance between their centres is 3.0cm



Calculate in km:

- (i) The length of leg CD (2mks)

- (ii) The length of the leg DEG ($\pi=3.142$) (2mks)


- (iii) The length of the leg HIC ($\pi=3.142$) (2mks)

- (iv) During a race, the course is manned by race officials placed 500m apart and each is paid Kshs.2300/= per day. How much is needed to pay race officials for one day event (4mks)

23. A relief organization has to transport at least 80 people and at least 18 tonnes of supplies to a site. There are two types of vehicles available type A and B. type A can carry 900kg of supplies and 6 people while type B can carry 1350kg of supplies and 5 people. There are at most 12 vehicles of each type available. By putting X to represent the number of vehicles of type A and y to represent the number of vehicles of type B

(a) Write down all the four inequalities to represent the above information (4mks)

(b) On the grid provided, draw all the inequalities in (a) above (4mks)




(c) Use the graph in (b) above the determine the least number of vehicles required at the site (2mks)

24. Given that $y = 2x^\circ + \cos \frac{1}{2} x^\circ$, complete the table below for the missing values of y , correct to 1 decimal place

X°	0°	30°	60°	90°	120°	150°	180°	210°	240°	270°	300°	330°	360°
$Y = \sin 2x + \cos \frac{1}{2} x$	1	1.8			-0.4	-0.6			0.4	-0.7			-1

- (b) On the grid provide below, draw the graph of $y = \sin 2x^\circ + \cos \frac{1}{2} x^\circ$ for $0 \leq x \leq 360^\circ$. Take the scale 1cm for 30° on the x-axis. 2 cm for 0.5 units on the y-axis. (4mks)



(c) Use the graph to estimate

(i) The minimum value of y

(ii) The value of X for which $\frac{1}{2} \sin 2x + \frac{1}{2} \cos \frac{1}{2} x \geq 0.25$

For More Free KCSE Past papers Visit www.freekcsepastpapers.com