

1. A small crystal of potassium manganate(VII) was placed in a beaker containing water. The beaker was left standing for two days without shaking. State and explain the observations that were made. (2 marks)

.....

.....

.....

2. When a hydrated sample of calcium sulphate  $\text{CaSO}_4 \cdot x\text{H}_2\text{O}$  was heated until all the water was lost, the following data was recorded:

|                                   |   |          |
|-----------------------------------|---|----------|
| Mass of crucible                  | = | 30.296 g |
| Mass of crucible + hydrated salt  | = | 33.111 g |
| Mass of crucible + anhydrous salt | = | 32.781 g |

Determine the empirical formula of the hydrated salt (Relative formula mass of  $\text{CaSO}_4 = 136$ ,  $\text{H}_2\text{O} = 18$ ). (3 marks)

.....

.....

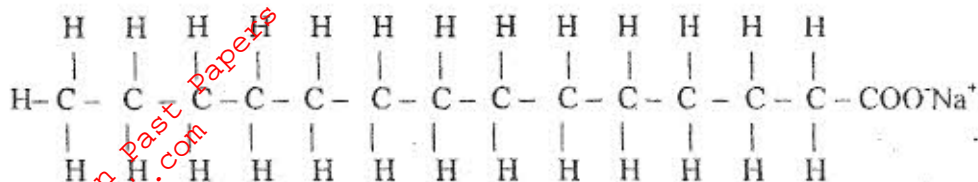
.....

.....

3. Complete the following table by filling in the missing test and observations. (3 marks)

| No. | Gas                | Test                                      | Observation       |
|-----|--------------------|---|-------------------|
| I   | Chlorine           | Put a moist red litmus paper into the gas |                   |
| II  | Sulphur (IV) oxide |   | Paper turns green |
| III | Butene             | Add a drop of bromine water               |                   |

4. The structure of a detergent is



(a) Write the molecular formula of the detergent. (1 mark)

.....

(b) What type of detergent is represented by the formula? (1 mark)

.....

(c) When this type of detergent is used to wash linen in hard water, spots (marks) are left on the linen. Write the formula of the substance responsible for the spots (marks). (1 mark)

.....

5. Phosphoric acid is manufactured from calcium phosphate according to the following equation.



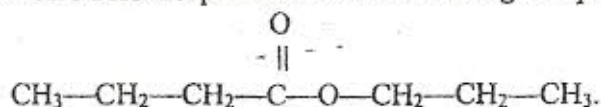
Calculate the mass in (Kg) of phosphoric acid that would be obtained if 155 Kg of calcium phosphate reacted completely with the acid (Ca = 40, P = 31, S = 32, O = 16, H = 1) (2 marks)

.....

.....

.....

6. The structure below represents a sweet smelling compound.



Give the names of the two organic compounds that can be used to prepare this compound in the laboratory. (2 marks)

.....

.....

7. (a) What are isotopes? (1 mark)

.....

.....

(b) Determine the number of neutrons in  $^{18}_8\text{O}$ . (1 mark)

.....  
.....

8. (a) State the observation made at the end of the experiment when a mixture of iron powder and sulphur is heated in a test tube. (1 mark)

.....  
.....

(b) Write an equation for the reaction between the product in (a) above and dilute hydrochloric acid. (1 mark)

.....  
.....

(c) When a mixture of iron powder and sulphur is heated, it glows more brightly than that of iron filings and sulphur. Explain this observation. (1 mark)

.....  
.....  
.....

9. Zinc reacts with both concentrated and dilute sulphuric (VI) acid. Write equations for the two reactions. (2 marks)

.....  
.....  
.....  
.....

10. When magnesium was burnt in air, a solid mixture was formed. On addition of water to the mixture a gas which turned moist red litmus paper blue was evolved. Explain these observations. (2 marks)

.....  
.....  
.....

11. The table below gives atomic numbers of elements represented by the letters A, B, C and D.

| Element       | A  | B  | C  | D  |
|---------------|----|----|----|----|
| Atomic number | 15 | 16 | 17 | 20 |

Use the information to answer the questions that follow.

(a) Name the type of bonding that exists in the compound formed when A and D react. (1 mark)

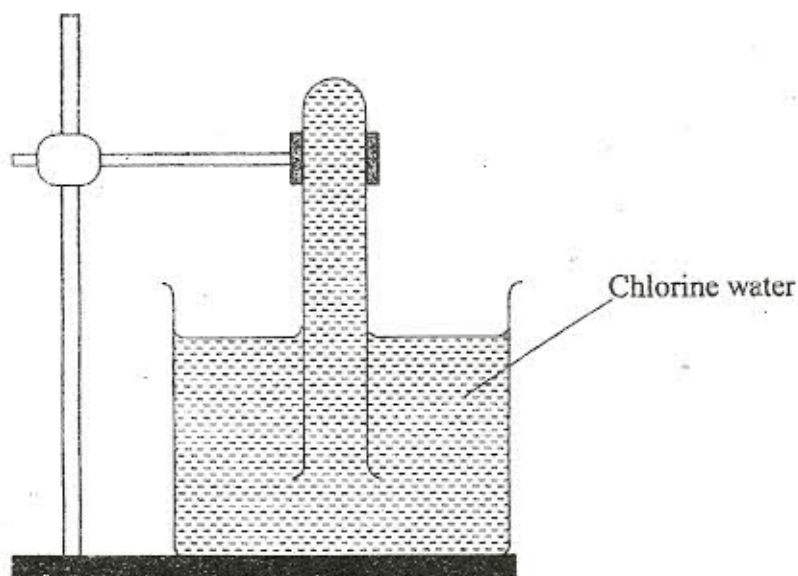
.....

(b) Select the letter which represents the best oxidizing agent. Give a reason for your answer. (2 marks)

.....

.....

12. In an experiment, a test-tube full of chlorine water was inverted in chlorine water as shown in the diagram below and the set up left in sunlight for one day.



After one day, a gas was found to have collected in the test-tube.

(a) Identify the gas. (1 mark)

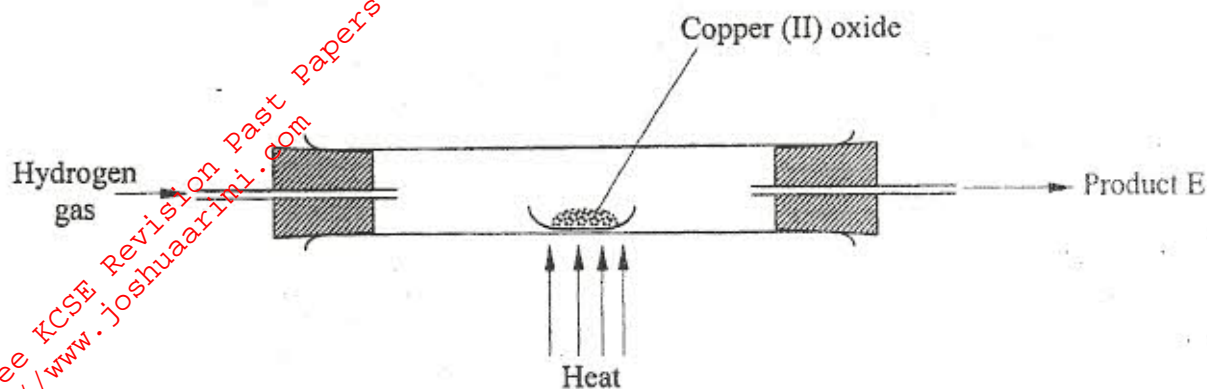
.....

(b) What will happen to the pH of the solution in the beaker after one day? Give an explanation. (2 marks)

.....

.....

13. In a laboratory experiment hydrogen gas was passed over heated copper (II) oxide as shown in the diagram below.



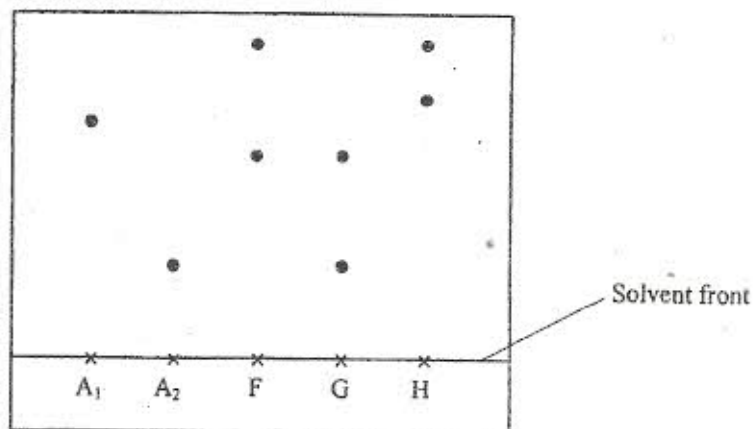
Describe a chemical test that can be used to identify the product E. (2 marks)

.....

.....

.....

14. Samples of urine from three participants F, G and H at an international sports meeting were spotted onto a chromatography paper alongside two from illegal drugs A<sub>1</sub> and A<sub>2</sub>. A chromatogram was run using methanol. The figure below shows the chromatogram.



- (a) Identify the athlete who had used an illegal drug. (1 mark)

.....

- (b) Which drug is more soluble in methanol? (1 mark)

.....

15. The table below gives the solubilities of substances J, K and L at different temperatures.

| Substance | Solubility in grammes per 100 g water at |      |       |        |
|-----------|--|------|-------|--------|
|           | 0°C                                      | 20°C | 40°C  | 60°C   |
| J         | 0.334                                    | 0.16 | 0.097 | 0.0058 |
| K         | 27.60                                    | 34.0 | 40.0  | 45.5   |
| L         | 35.70                                    | 36.0 | 36.6  | 37.3   |

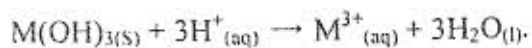
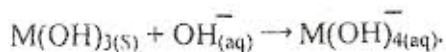
Select the substance which, when dissolved in water, heat is given out. Give a reason. (2 marks)

.....  
.....  
.....

16. Starting with copper metal, describe how a sample of crystals of copper (II) chloride may be prepared in the laboratory. (3 marks)

.....  
.....  
.....  
.....

17. A compound whose general formula is  $M(OH)_3$  reacts as shown by the equations below.



- (a) What name is given to compounds which behave like  $M(OH)_3$  in the two reactions. (1 mark)

.....  
.....

- (b) Name two elements whose hydroxides behave like that of M. (2 marks)

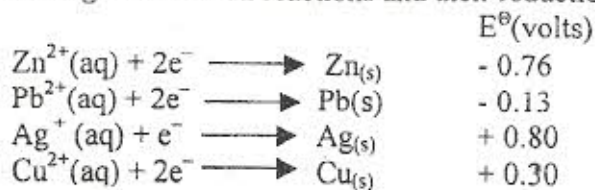
.....  
.....

18. The grid below is part of the periodic table. Use it to answer the questions that follow. (The letters are not the actual symbols of the elements).

|   |   |  |  |  |   |   |   |
|---|---|--|--|--|---|---|---|
|   |   |  |  |  |   |   |   |
|   |   |  |  |  | R | S |   |
|   | Q |  |  |  |   | T | U |
| P |   |  |  |  |   |   |   |
|   |   |  |  |  |   |   |   |

- (a) Indicate on the grid the position of an element represented by letter, V whose atomic number is 14. (1 mark)
- (b) Select a letter which represents a monoatomic gas. (1 mark)
- .....
- (c) Write an equation for the reaction between Q and T. (1 mark)
- .....

19. The following are half-cell reactions and their reduction potentials.



- (a) Write the cell representation for the electrochemical cell that would give the highest  $E^\ominus$ . (1 mark)
- .....
- .....
- (b) State and explain the observations made when a copper rod is placed in a beaker containing silver nitrate solution. (2 marks)
- .....
- .....
- .....

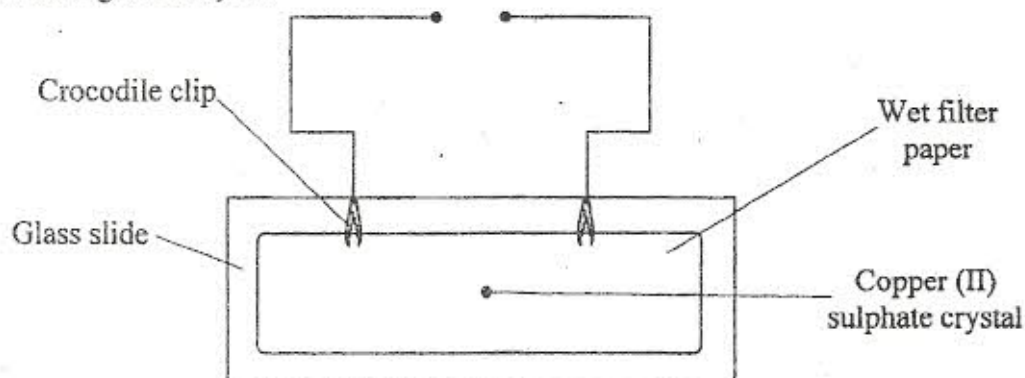
20. (a) State the Graham's law of diffusion. (1 mark)

.....  
.....  
.....

(b) The molar masses of gases W and X are 16.0 and 44.0 respectively. If the rate of diffusion of W through a porous material is  $12 \text{ cm}^3 \text{ s}^{-1}$  calculate the rate of diffusion of X through the same material. (2 marks)

.....  
.....  
.....

21. The diagram below represents an experiment that was set up to investigate movement of ions during electrolysis.



When the circuit was completed, it was noticed that a blue colour spread towards the right.

(a) Explain this observation. (2 marks)

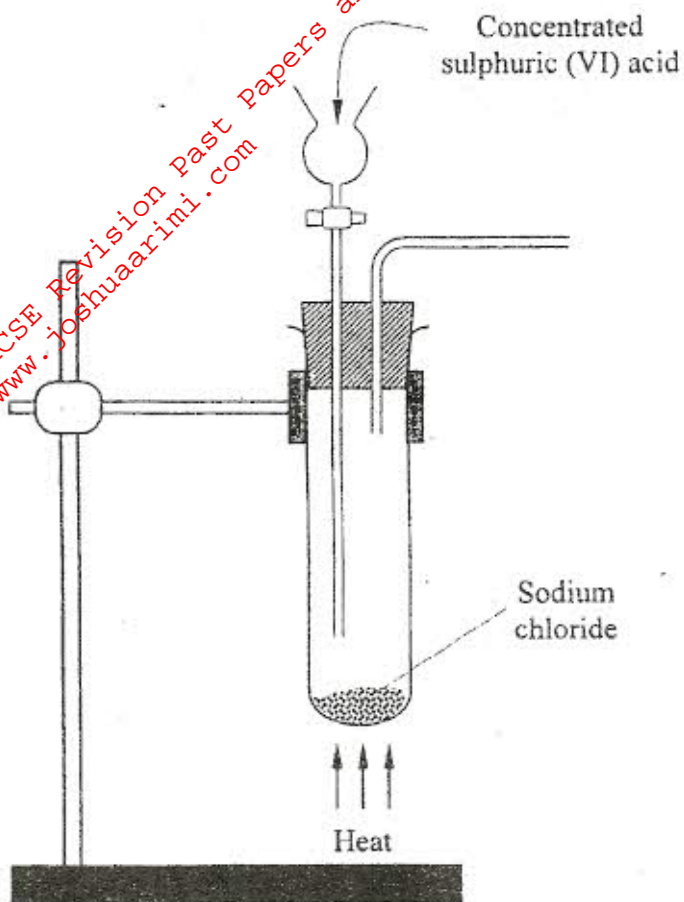
.....  
.....  
.....

(b) Write the equation for the reaction that occurred at the anode. (1 mark)

.....  
.....

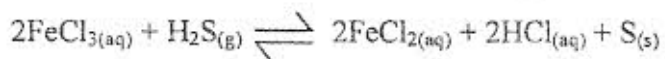


22. The diagram below is part of a set up used in the laboratory preparation of a gas.



Complete the diagram to show how a dry sample of the gas can be collected. (3 marks)

23. In a closed system, aqueous iron (III) chloride reacts with hydrogen sulphide gas as shown in the equation below.



State and explain the observation that would be made if dilute hydrochloric acid is added to the system at equilibrium. (2 marks)

.....

.....

24. (a) A radioactive substance emits three different particles. Give the symbol of the particle with the highest mass. (1 mark)

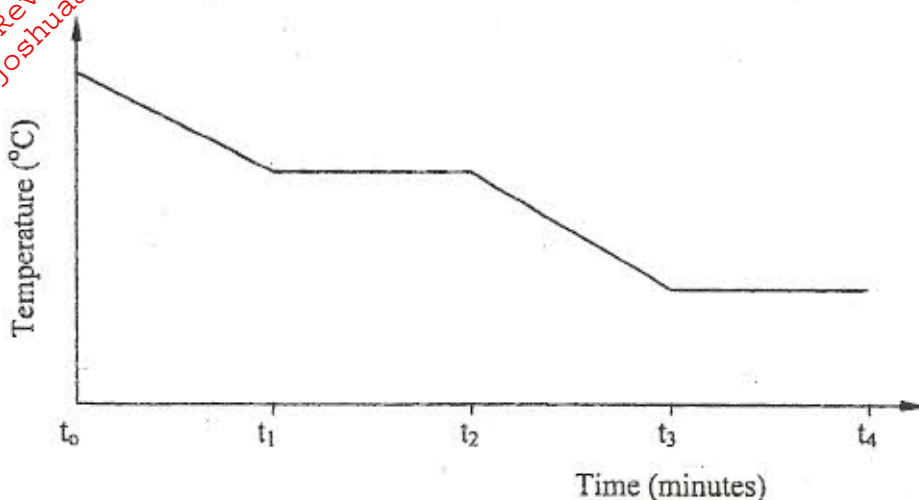
.....

- (b) (i) Find the values of  $Z_1$  and  $Z_2$  in the nuclear equation below.



.....  
.....  
(ii) What type of nuclear reaction is represented in b(i) above? (1 mark)

25. The graph below is a cooling curve of a substance from gaseous state to solid state.



Give the name of the:

(a) process taking place between  $t_0$  and  $t_1$ ; (1 mark)

.....  
(b) energy change that occurs between  $t_3$  and  $t_4$ . (1 mark)

26. When solid  $B_1$  was heated, a gas which formed a white precipitate when passed through lime water was produced. The residue was dissolved in dilute nitric (V) acid to form a colourless solution  $B_2$ . When dilute hydrochloric acid was added to solution  $B_2$  a white precipitate which dissolved on-warming was formed.

(a) Write the formula of the:

I cation in solid  $B_1$ . (1 mark)

.....  
II anion in solid  $B_1$ . (1 mark)

(b) Write an ionic equation for the reaction between the residue and dilute nitric (V) acid. (1 mark)

7. In an experiment to determine the percentage of magnesium hydroxide in an anti-acid, a solution containing 0.50 g of the anti-acid was neutralized by 23.0 cm<sup>3</sup> of 0.10 M hydrochloric acid. (Relative formula mass of magnesium hydroxide = 58)  
Calculate the:

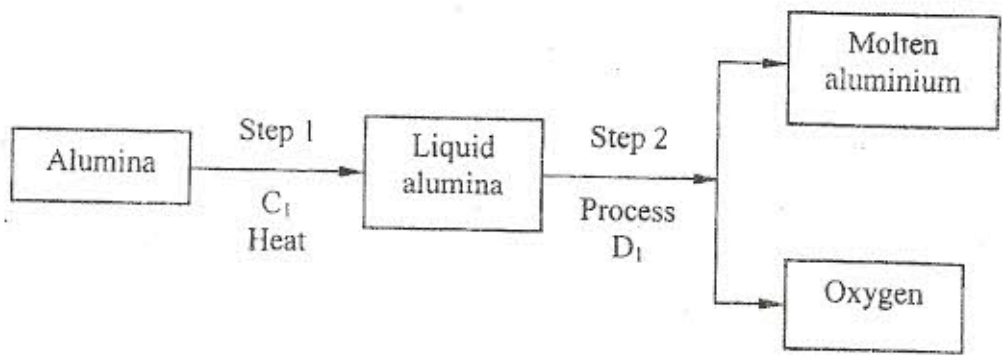
(a) mass of magnesium hydroxide in the anti-acid: (2 marks)

.....  
 .....

(b) percentage of magnesium hydroxide in the anti-acid. (1 mark)

.....  
 .....

28. During the extraction of aluminium from its ores; the ore is first purified to obtain alumina. The flow chart below shows the stages in the extraction of aluminium from alumina.



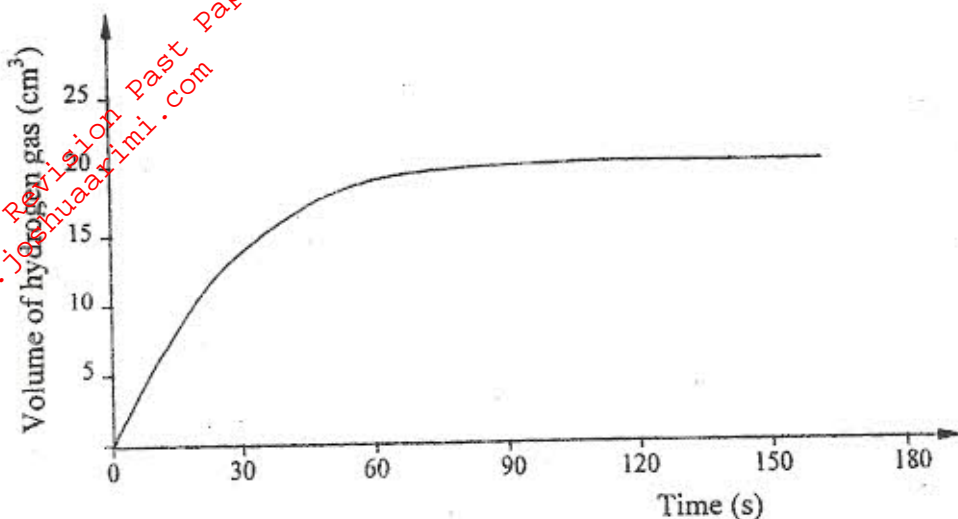
(a) Name:  
(i) Substance C<sub>1</sub> (1 mark)

(ii) Process D<sub>1</sub> (1 mark)  
 .....

(b) Give two reasons why aluminium is used extensively in the making of cooking pans. (1 mark)

.....  
 .....

29. A certain mass of a metal E<sub>1</sub> reacted with excess dilute hydrochloric acid at 25°C. The volume of hydrogen gas liberated was measured after every 30 seconds. The results were presented as shown in the graph below.



- (a) Name one piece of apparatus that may have been used to measure the volume of the gas liberated. (1 mark)

.....

- (b) (i) On the same axis, sketch the curve that would be obtained if the experiment was repeated at 35°C. (1 mark)

- (ii) Explain the shape of your curve in b(i) above. (1 mark)

.....

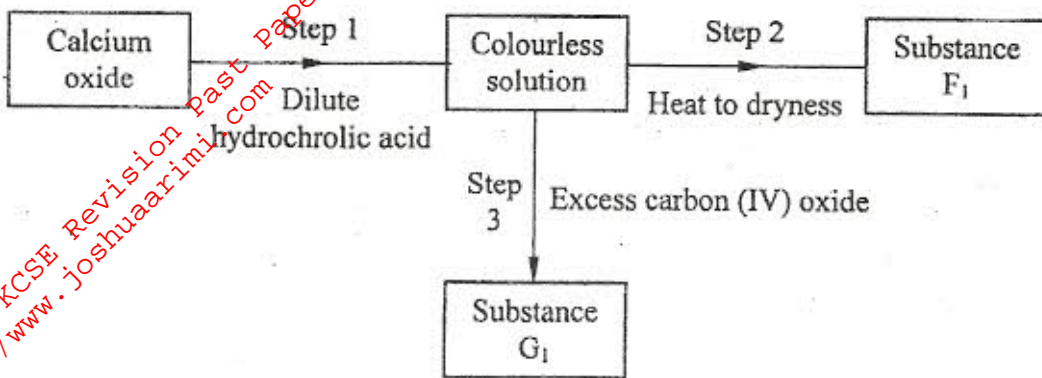
.....

30. Crude oil contains sulphur. What would be the effect to the environment of using fuel containing sulphur? (1 mark)

.....

.....

31. Study the flow chart below and answer the questions that follow.



(a) Give the name of the process that takes place in step 1. (1 mark)

.....

(b) Give:  
(i) the name of substance G<sub>1</sub>. (1 mark)

.....

(ii) one use of substance F<sub>1</sub>. (1 mark)

.....