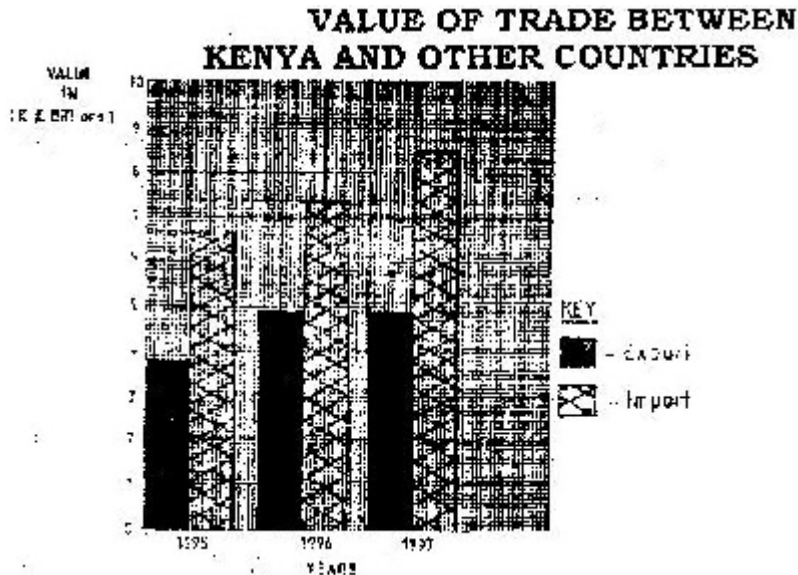


**GEOGRAPHY PAPER 312/2 K.C.S.E 2001
QUESTIONS
SECTION A**

Answer all the questions in this section

1. The bar graphs show the value of trade between Kenya and other countries for the year 1995, 1996 and 1997. Use it to answer question (a)



Scale 1cm rep 1 billion K

SOURCE OF DATA: STATISTICAL ABSTRACT (K) 1998

- a)
 - (i) Name the type of bar shown above
 - (ii) Calculate the cumulative differences in value between Kenya and other countries
 - (b) Give two reasons why there is an imbalance of trade between Kenya and other countries
2.
 - (a) Name two cash crops grown in plantations in the highlands east of the valley
 - (b) Give three physical conditions that are necessary for the growth of cloves
 3.
 - (a) State three physical problems experienced by farms at Mwea- Tembere irrigation
 - (b) Outline methods that were used to rehabilitate land in the Tennessee valley in the United States of America (USA)
 4.
 - (a) Name two districts in the rift valley province of Kenya where Merino sheep are reared
 - (b) Compare sheep farming between Kenya and Australia
 5. Give three effects of liberalization of the oil industry in Kenya.

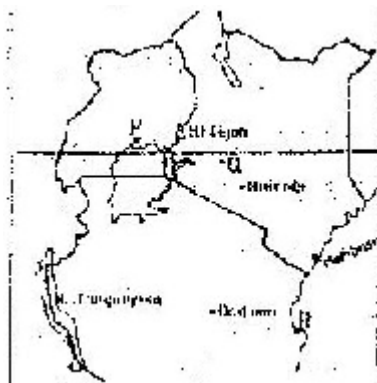
SECTION B

Answer question 6 and any other questions from this section

6. Study the photograph below and use it to answer questions (a)



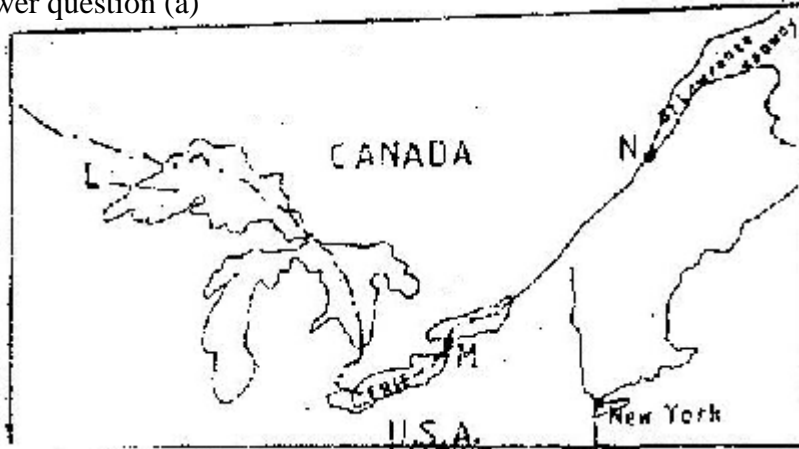
- (a)
- (i) Name the type of photograph shown
 - (ii) Draw a rectangle measuring 15cm to 10cm to represent the area of photograph
 - (iii) On the rectangle draw a sketch of the photograph and label three physical features
 - (iv) Explain two physical conditions that would discourage setting up of a game park in the area shown on the photograph
- (b) Apart from national parks, outline four other ways in which wildlife is conserved in Kenya
- (c) Give four reasons why domestic tourism is being encouraged in Kenya
- (d) Explain four factors which Switzerland receive more tourists than Kenya
7. Use the map of East Africa below to answer questions



- (a) Name the towns marked P, Q and R
- (b)
- (i) Explain three physical factors that influence the location of Mombasa
 - (ii) Explain four problems that Mombasa experiences as it grows

- (c) Compare the ports of Mombasa and Rotterdam under the following subheadings
- Transport links to the interior
 - Mechanization of the ports
 - Size of the ports
 - Climate experienced at the ports

8. Below a sketch of the map of the great lakes- St. Lawrence Seaway. Use it to answer question (a)



- (a) Name
- The lake marked L
 - The waterfall marked M
 - The port marked N
- (b) Explain three ways in which the great lakes St. Lawrence sea way has contributed to the economy of Canada and the United States of America (U.S.A)
- (c) Explain four factors that hinder the development of railway links among Africa countries
- (d) (i) State two recent development that have taken place in Kenya to improve Communication of information
- (ii) Explain three problems facing telephone as a means of communication in Kenya
9. (a) (i) Apart from water and air pollution, name two other types of pollution
- (ii) Identify three ways through which water is polluted
- (iii) Explain three effects of air pollution on the environment
- (b) (i) Explain three factors that lead to frequent flooding in the lake region of Kenya
- (ii) Explain two ways through which floods are controlled in the lake region of Kenya
- (c) State four effects of wind as an environmental hazard in Kenya

For More Free KCSE Revision Past Papers and Answers
Visit <http://www.joshuaarimi.com>