


SECTION A

Answer ALL questions in this section.

1. (a) You are provided with the following:-

An illuminated object, a convex lens, a lens holder, a plane mirror and a metre rule.
Describe with the aid of a labelled diagram an experiment to determine the focal length of the lens (5 marks)

- (b) A small vertical object is placed 28 cm in front of a convex lens of focal length 12 cm. On the grid provided, draw a ray diagram to locate the image. The lens position is shown. (Use a scale: 1 cm represents 4 cm) (5 marks)



Determine the image distance

- (c) Figure 1. shows a human eye with a certain defect.



- (i) Name the defect (1 mark)
- (ii) On the same diagram, sketch the appropriate lens to correct the defect and sketch rays to show the effect of the lens (2 marks)

2. (a) **Figure 2.** shows a wheel and axle being used to raise a load W by applying an effort F . The radius of the large wheel is R and of the small wheel r as shown.

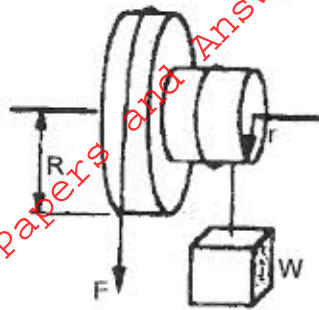


Figure 2

- (i) Show that the velocity ratio (VR) of this machine is given by $\frac{R}{r}$. (3 marks)
- (ii) Given that $r = 5$ cm, $R = 8$ cm, determine the effort required to raise a load of 20 N if the efficiency of the machine is 80% (4 marks)
- (iii) It is observed that the efficiency of the machine increases when it is used to lift larger loads. Give a reason for this. (1 mark)

- (b) **Figure 3.** shows a simplified hydraulic jack. The cross section area A_2 of the load piston is 25 times the area A_1 of the effort piston ($\frac{A_2}{A_1} = 25$) F_1 is the force applied (effort) while F_2 represents the load.

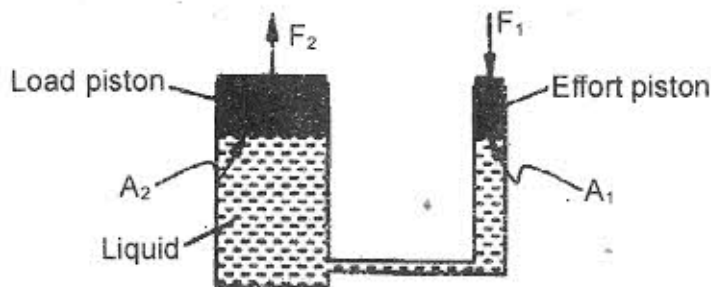


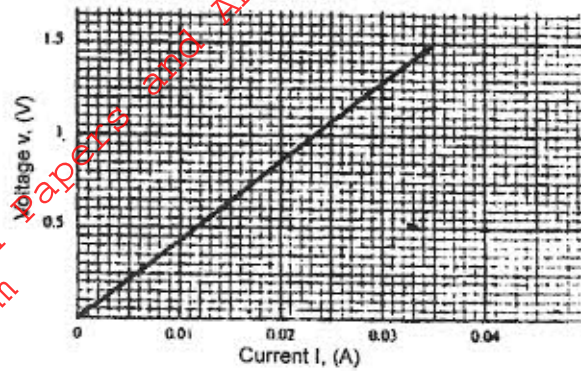
Figure 3

- (i) Write an expression for the pressure exerted on the liquid by the effort piston. (1 mark)

A mechanic applies a force of 100 N on the effort piston while raising the rear part of a car.

- (ii) Determine the maximum load that can be raised (2 marks)
- (iii) Give a reason why gas is not suitable for use in place of the liquid in the jack. (1 mark)

3. (a) The graph in Figure 3. shows the voltage-current relationship for a certain conductor.



- (i) determine the resistance of the conductor (4 marks)

- (ii) Given that the length of the conductor used was 0.50 m and the radius of its cross-section was 0.40mm, determine the resistivity, ρ , of the material of the conductor (4 marks)

- (b) In the circuit diagram shown in Figure 4. each cell has an e.m.f of 1.5V and internal resistance of 0.5Ω . The capacitance of each capacitor is $1.4\mu\text{F}$. The switch S is now closed. Determine:

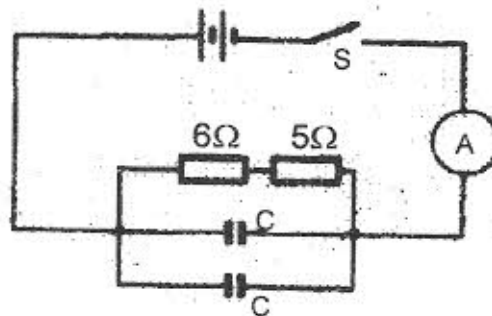
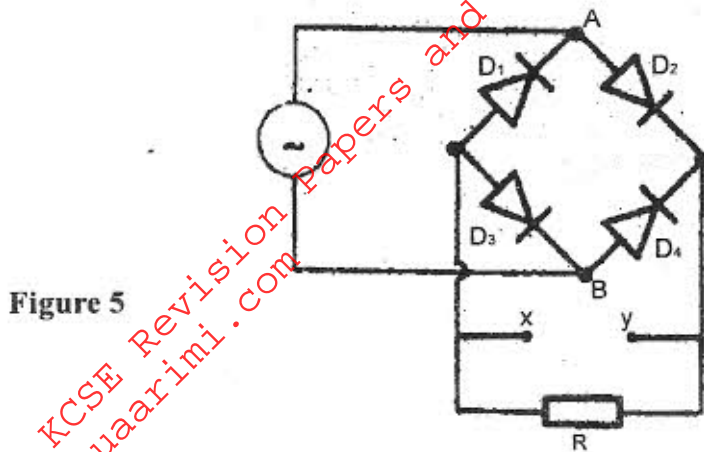


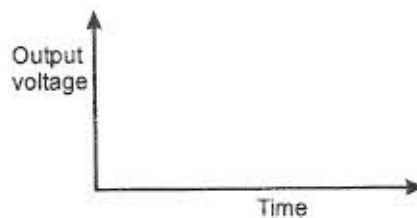
Figure 4

- (i) The ammeter reading (3 marks)
- (ii) The charge on each capacitor (3 marks)

4. (a) Explain how doping produces an n-type semi-conductor for a pure semi-conductor material (3 marks)
- (b) Figure 5. shows the circuit of a rectifier using four diodes D_1 , D_2 , D_3 and D_4



- (i) Explain how a rectified output is produced from the set up when an a.c input is connected across AB. (4 marks)
- (ii) On the axis provided sketch the graph of output voltage against time for the rectifier (1 mark)

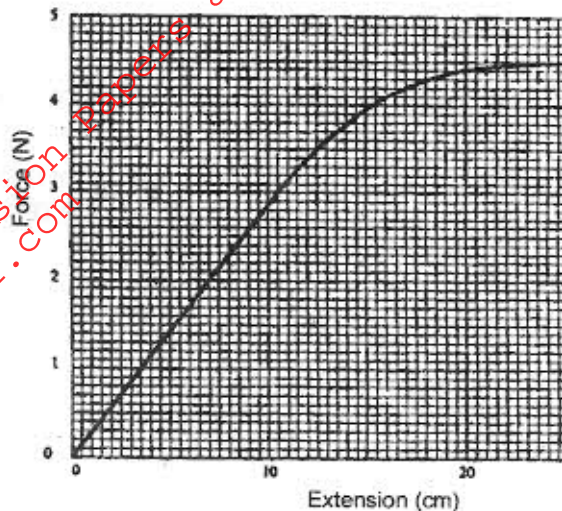


- (iii) A capacitor is now connected across XY. Explain the effect on the output. (2 marks)
- (c) A transistor in a common-emitter amplifier has $hf_2 = 120$. A signal in the input causes the base current to change by $20\mu\text{A}$. What is the corresponding change in the output voltage if the load resistance is 1000Ω ? (4 marks)

5. (a) State Hooke's law

(1 mark)

(b) One end of a piece of rubber was fixed to a rigid support and the other end pulled with a force of varying magnitude. The graph in Figure 6. shows the relationship between the force (N) and the extension (cm)



Using the graph determine:

(i) The stretching force at the elastic limit

(2 marks)

(ii) The tensile stress in the rubber at an extension of 5 cm if the cross-section area of the rubber is 0.25 cm^2

(4 marks)

(iii) The tensile strain in the rubber at an extension of 5 cm if the original length was 2m

(3 marks)

(c) In Figure 7. girders AB, BC, CD, ED, EB and BD were joined to make the rigid structure shown. The load W hangs from the structure as shown.

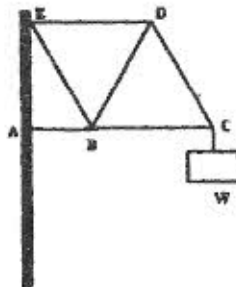


Figure 7

Which of the girders can be replaced with strings without affecting the structure?

(2 marks)

SECTION B

Answer ONE question from this section

6. (a) Define the term angular velocity (1 mark)
- (b) A body moving with uniform angular velocity is found to have covered an angular distance of 170 radians in t seconds. Thirteen seconds later it is found to have covered a total of angular distance of 300 radians. Determine t . (3 marks)
- (c) Figure 8. shows a body of mass m attached to the centre of a rotating table with a string whose tension can be measured. (The device for measuring the tension is not shown in the figure)

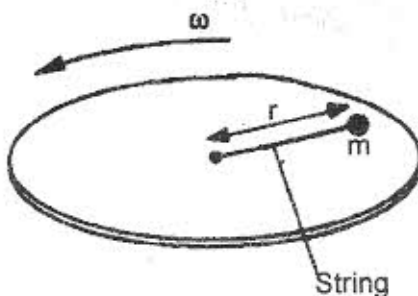


Figure 8.

The tension, T , on the string was measured for various values of angular velocity, ω . The distance r of the body from the centre was maintained at 30 cm. Table 1 shows the results obtained.

Table 1

Angular Velocity $\omega(\text{rads}^{-1})$	2.0	3.0	4.0	5.0	6.0
Tension T (N)	0.04	0.34	0.76	1.30	1.96

- (i) Plot the graph of T (y-axis) against ω^2 (5 marks)
- (ii) From the graph, determine the mass, m , of the body given that

$$T = m\omega^2 r - C$$

where C is a constant (4 marks)

- (iii) Determine the constant C and suggest what it represents in the set up. (2 marks)

7. (a) What is meant by **Radioactivity**? (1 mark)
- (b) With an aid of a labelled diagram, explain the working of a Geiger Müller tube as a detector of radiation. (5 marks)
- (c) In an experiment to determine the half-life of a certain radioactive substance, the activity in disintegrations per minute was measured for sometime. **Table 1** shows the results obtained.

Time in minutes	0	10	20	30	40	50	60	70	80
Activity in disintegrations per minute	152	115	87	66	50	38	20	12	6

- On the grid provided plot a suitable graph and use it to determine the half life, $t_{1/2}$ of the substance. (7 marks)
- (d) At time $t = 40$ minutes, the activity of a sample of a certain radioactive isotope with a half life of 12 minutes is found to be 480 disintegrations per minute. Determine the time at which the activity was 3840 disintegrations per minute. (2 marks)