


**GEOGRAPHY**  
**PAPER 2**  
**TIME: 23/4HRS**

**SECTION A**

Answer all the questions from this section

1. The diagram below represent some commercial fishing methods.

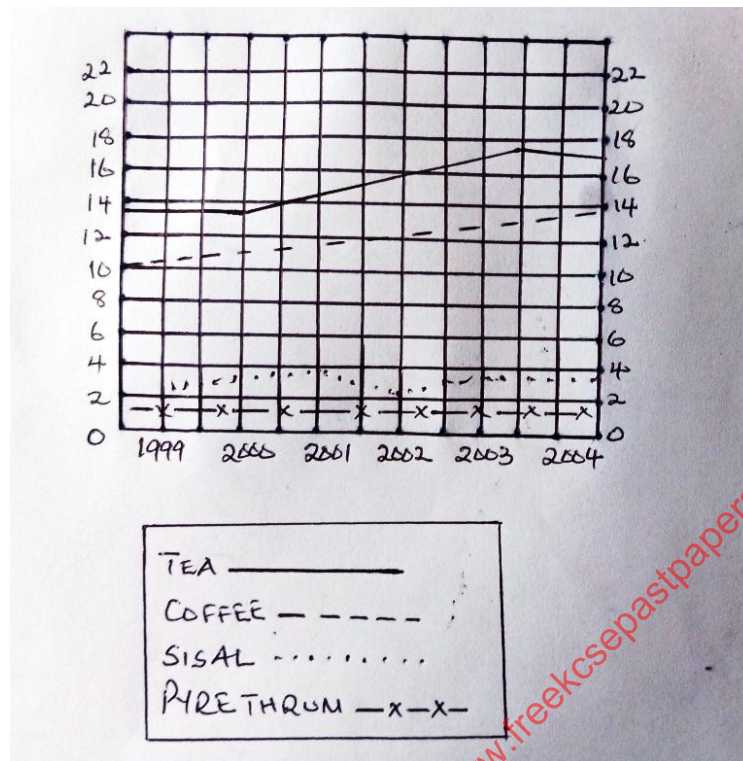


- (a) Name the fishing method marked K and L (2mks)
- (b) highlight three reasons why marine fishing is not well developed in the Kenyan coast. (3mks)
2. (a) Name three marine national parks in Kenya. (3mks)
- (b) Outline three ways game reserves are of benefit to the communities living near them. (3mks)
3. (a) Give three features of horticultural farming. (3mks)
- (b) State two reasons why horticultural produce are exported by air. (2mks)
4. (a) Apart from air pollution list three other types of pollution. (3mks)
- (b) State two factors which favoured growth of Kisumu as an urban centre. (3mks)
5. Highlight four problems that arise from population decline. (4mks)

**SECTION B**

**ANSWER QUESTION 6 AND ANY OTHER TWO QUESTIONS IN THIS SECTION.**

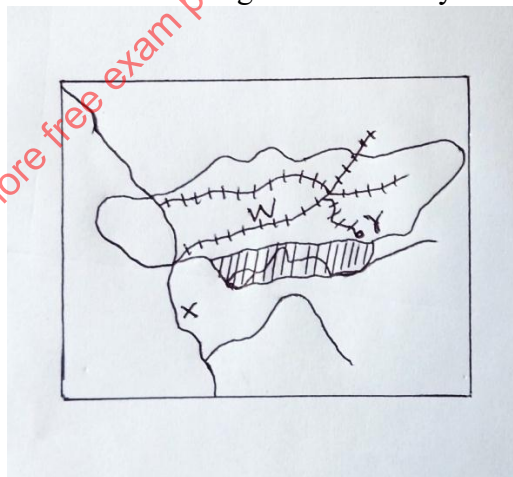
6. Below is one of the methods of statistical data presentation. Use it to answer the questions which follows.



- (a) (i) Name the method of statistical data presentation shown above. (1mk)
- (ii) Describe the trend of tea production in Kenya between the years 1999 and 2004. (3mks)
- (iii) State two advantages of using this method to present statistical data. (2mks)
- (b) (i) Give three physical factors that favour coffee growing in the Kenyan highlands. (3mks)
- (ii) State three causes of the high decline of coffee production in Kenya today. (3mks)
- (c) Explain four benefits of coffee cultivation to Brazil. (8mks)
- (d) (i) List three problems experienced in cocoa farming in Ghana. (3mks)
- (ii) Give three uses of cocoa. (3mks)
- (iii) Name three crops grown in Kenya that are processed to produce vegetable oil. (3mks)
7. (a) (i) Name two softwood exotic tree species planted in Kenya (2mks)
- (ii) State three reasons why it is necessary to carry out afforestation programmes in Kenya. (3mks)
- (b) Explain three environmental challenges facing the exploitation of tropical rain forests in Africa. (6mks)

- (c) Compare the species of softwood trees in Kenya and Canada under the following sub-headings.
  - The diversity of the softwood tree species. (2mks)
  - The diversity of the softwood trees species. (2mks)
  - The gestation period of trees species (2mks)
  - The acreage of the softwood tree species. (2mks)
- (d) Explain four human problems facing forests in Kenya (8mks)

8. (a) (i) What is international trade. (2mks)
- (ii) State five factors which influence the development of international trade. (2mks)
- (b) (i) Explain three reasons why there is an imbalance of trade between Kenya and other countries. (6mks)
- (c) (i) Give two reasons why Kenya imports some of the items produces. (2mks)
- (ii) Give two reasons why Kenya's trade with other countries (2mks)
- (d) (i) List three ways in which Kenya is negatively affected by international trade (3mks)
- (ii) Suggest two ways by which Kenya can reduce her unfavourable balance of trade. (3mks)
- (iii) State two economic roles played by the European union as a trade block (2mks)
9. (a) (i) Use the map of Ruhr industrial region in Germany to answer question (1) (2mks)



- Name
- The river marked X
  - The canal marked w

- The town marked y
  -
- (b) (i) Other than iron and steel, name three industries located in the region of Germany. (3mks)
- (ii) Explain four factors which influenced the location of iron and steel industry in the Ruhr region of Germany (8mks)
- (c) (i) Give four reasons why the development of the Jua Kali industry is encouraged in Kenya. (4mks)
- (ii) State four reasons why most of Kenya's scrap metal Jua Kali industries are located in the urban centres. (4mks)
- (d) List three problems hindering decentralization of industries in Kenya. (3mks)
10. (a) (i) Other than water name two renewable sources of energy which are exploited in Kenya. (2mks)
- (ii) Explain four physical factors that influence the location of a hydro-electric power station. (8mks)
- (b) Explain four benefits that would result from rural electrification. (8mks)
- (c) State four problems that Kenya experiences as a result of overdependence on petroleum. (4mks)
- (d) Give three factors that hinder expansion of geothermal power production in Kenya. (3mks)

for more free exam papers visit: [www.freekenyaexamspapers.com](http://www.freekenyaexamspapers.com)